

Name: \_\_\_\_\_

Date: \_\_\_\_\_

Homework

# ELapsed Time

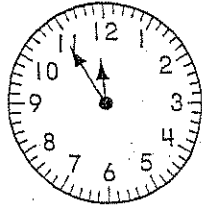
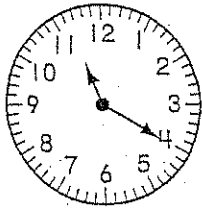
Make a t-chart for each of the problems. Write the time shown on each clock.

1.

1.

Begin

End

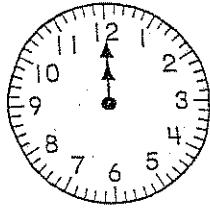
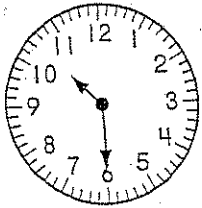


2.

2.

Begin

End

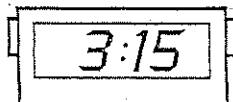



3.

3.

Begin

End



Name: \_\_\_\_\_

Date: \_\_\_\_\_

Homework

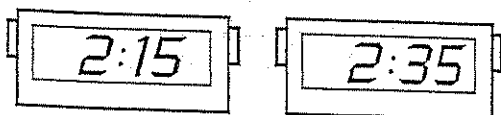
# Elapsed Time

Make a t-chart for each of the problems. Write the time shown on each clock.

4.

Begin

End

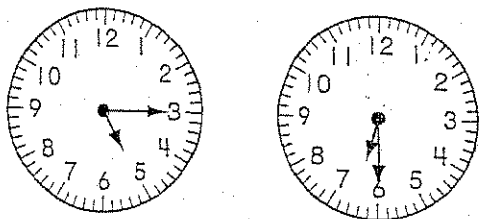


4.

5.

Begin

End

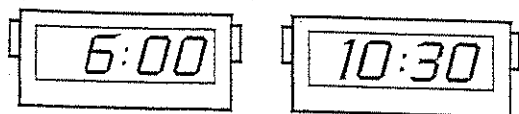


5.

6.

Begin

End



6.